

**EMMANUEL MISSION SR SEC SCHOOL, BEAWAR**  
**ONLINE CLASSES**  
**WEEK – 40 (26.11.2020)**  
**CLASS – III**

\*\*\*\*\*

English: Kindly see below

Hindi: Kindly see below

Mathematics: Kindly see below

General Science: Kindly see below

Social Studies: Kindly see below

Computer Science: Kindly see below

General Knowledge: Kindly see below

Moral Science: Kindly see below

\*\*\*\*\*

**EMMANUEL MISSION SR SEC SCHOOL, BEAWAR**  
**ENGLISH**  
**CLASS – III**  
**Sample Paper 2**

---

Q. 1 Identify the noun. Girl

- (a) Masculine
- (b) Feminine
- (c) Common
- (d) Neuter

Q. 2 Identify the masculine nouns.

The old man has a big house.

- (a) house
- (b) big
- (c) old
- (d) man

Q. 3 put a apostrophe ( ' ) in the right place.

Butterfly has wings.

- (a) Butterfly wings'
- (b) Butterfly' wings
- (c) Butterfly's wings
- (d) Butterfly wing's

Q. 4 Tick the correct pronoun.

\_\_\_\_\_ are going to the market.

- (a) I
- (b) We
- (c) She
- (d) He

Q. 5 Choose the correct interrogative pronouns.

\_\_\_\_\_ is your family doctor?

- (a) What
- (b) Who
- (c) Which
- (d) Whom

Q. 6 Choose the correct reflexive pronoun.

Children managed to open the door\_\_\_\_\_.

- (a) itself
- (b) themselves
- (c) ourselves
- (d) himself

Q. 7 Choose the correct adjective of quality.

My mother bakes \_\_\_\_\_ cakes.

- (a) delicious
- (b) bright
- (c) funny
- (d) busy

Q. 8 Choose the correct form of adjectives.

She is \_\_\_\_\_ than her sister.

- (a) strong
- (b) stronger
- (c) strongest
- (d) more stronger

Q. 9 Complete the sentence with suitable adjective.

There is a \_\_\_\_\_ ant crawling up your arm.

- (a) her
- (b) sleepy
- (c) tiny
- (d) bright

Q. 10 Choose the correct word .

Take the other road. It is \_\_\_\_\_ this.

- (a) short
- (b) shorter than
- (c) shortest
- (d) more short

Q. 11 Choose the correct opposite of the word- noisy

- (a) quiet
- (b) shout
- (c) pleasant
- (d) careful

Q. 12 Choose the correct answer. No one could see the chameleon because \_\_\_\_\_

- (a) he was the same colour as the tree trunk.
- (b) he was hidden behind the bushes.
- (c) he was not there in the forest.
- (d) he went away from the place.

Q. 13 Complete the sentence with the correct prepositional phrases.

I really need something \_\_\_\_\_. My head hurts badly.

- (a) for my headache
- (b) with patience
- (c) in a moment
- (d) across the river

Q. 14 Choose the correct answer. The bottom of the world is a \_\_\_\_\_.

- (a) stone
- (b) round
- (c) pool
- (d) little

Q. 15 Choose the correct answer. The merry brook sings a happy song to the speaker

- (a) about the hills from where it came
- (b) throughout the day in summer.
- (c) about the deep and slow river.
- (d) throughout the day in winter.

**EMMANUEL MISSION SR SEC SCHOOL, BEAWAR**  
**HINDI**  
**CLASS – III**  
**Sample Paper 2**

---

सही विकल्प चुनिए

1. व्हेल मछली कहाँ रहती थी ?

- क. काला सागर      ख. नदी  
ग. सफेद सागर      घ. तालाब

2. बिजली कहाँ चमकती है ?

- क. जमीन में      ख. बादल में  
ग. घर में      घ. सड़क पर

3. व्हेल मछली का भोजन क्या है ?

- क. घास      ख. पालक  
ग. मछलियाँ      घ. कुछ नहीं

4. नदी अंत में कहाँ चली जाती है ?

- क. नदी में      ख. घर में  
ग. बगीचे में      घ. समुद्र में

5. व्हेल मछली को खाना चाहता था ?

- क. भालू      ख. भेड़िया  
ग. खरगोश      घ. गिलहरी

6. प्रोफेसर राव को कौन-सा पुरस्कार मिला है ?

- क. भारत रत्न      ख. वीर चक्र  
ग. भौतिक रत्न      घ. रसायन चक्र

7. किस नदी को दक्षिण भारत की गंगा कहा गया है ?

- क. गंगा      ख. यमुना  
ग. गोदावरी      घ. सरस्वती

8. बरसात होने पर किसका मन डोलने लगता है ?

- क. जानवर का      ख. चातक का  
ग. भालू का      घ. मेंढक का

9. नदी आजकल ..... हो गई है ?

- क. सुगन्धित      ख. खुशबूदार  
ग. प्रदूषित      घ. जलधार

10. ....सब साथ चलेंगे।

- क. तुम      ख. हम  
ग. मैं      घ. कोई नहीं

11. 'ठंडी' का विलोम होगा।

- क. सरदी      ख. उत्तर  
ग. गरमी      घ. जाड़ा

12.'आकाश' का पर्यायवाची शब्द कौनसे है ?

- क. नभ,आसमान      ख.निगाह,नज़र  
ग.सरिता,नदी      घ.अधिक, ज्यादा

13. पानी के बिना कौन काफी समय तक जिंदा रह सकती है ?

- क.व्हेल मछली      ख.लोमड़ी  
ग. भालू      घ. खरगोश

14.बिजली चमकने पर कैसा शोर होता है ?

- क.धीरे      ख.हल्के  
ग. मध्यम      घ. कड़का

15.प्रोफेसर राव का जन्म कब हुआ था ?

- क. 1932      ख.1933  
ग.1934      घ. 1935

**Multiple choice questions :**

**Q1. Subtract and Tick (✓) the correct option :**  
Th. H. T. O  
 $\begin{array}{r} 8\ 5\ 8\ 6 \\ -\ 4\ 4\ 6\ 0 \\ \hline \end{array}$   
\_\_\_\_\_

a) 4126                      b) 4755  
c) 2112                      d) 6321

**Q2. Subtract :**  
 $6\ 5\ 6\ 6 - 3\ 8\ 6\ 2$

a) 2955                      b) 2704  
c) 4308                      d) 7254

**Q3. Subtract :**  
 $5111 - 2776$

a) 2959                  b) 2335                      c) 4301                      d) 6175

**Q4. Tick (✓) the correct option :**  
 $7\ 5\ 9$  from  $3\ 6\ 0\ 5$

a) 2959                  b) 987                      c) 2846                      d) 3144

**Q5. Multiply :**  
 $\begin{array}{r} 2\ 1\ 2\ 1 \\ \times\ 4 \\ \hline \end{array}$   
\_\_\_\_\_

a) 2464                      b) 1234  
c) 8484                      d) 2004

**Q6. Multiply :  $313 \times 23$**

a) 7199                      b) 2133                      c) 2121                      d) 7529

**Q7. Tick (✓) the correct option :**  
 $125 \times \underline{\hspace{1cm}} = 444 \times 125$

a) 444                      b) 0                      c) 1                      d) None of these

**Q8. Tick (✓) the correct option :**  
 $667 \times 10 = \underline{\hspace{1cm}}$

a) 667                      b) 6670                      c) 66                      d) 700

**Q9. Using the given division fact , tick (✓) the correct multiplication fact :**  
 $27 \div 9 = 3$

a)  $9 \times 3 = 27$                       b)  $3 \times 9 = 27$                       c) Both                      d) None of these

**Q10. Tick (✓) the correct option :**  
 $28 \div 28 = \underline{\hspace{1cm}}$

a) 1                      b) 0                      c) 28                      d) None of these

**Q11. Divide by long division method and tick (✓) the correct option :  $54 \div 9$**

a) Q = 8 , R = 0                      b) Q = 6 , R = 0                      c) Q = 1 , R = 7                      d) None of these

**Q12. Divide and tick (✓) the Quotient :**  
 $8\ 4\ 9\ 8 \div 7$

a) 1214                      b) 1753                      c) 2210                      d) 64

**Q13. In a school there are 3965 students. If the total number of boys are 2346. Find the number of girls? :**

- a) 1440                      b) 4675                      c) 1619                      d) 4411

**Q14. The cost of one almirah is Rs. 460. What will be the cost of such 12 almirahs :**

- a) Rs. 5520                      b) Rs. 5333                      c) Rs. 2575                      d) Rs. 1840

**Q15. There are 100 pages in a story book. She reads equal number of pages daily. At the end of 8 days how many pages does Rachana read ? How many pages would be left ?**

- a)  $Q = 40$  ,  $R = 2$                       b)  $Q = 12$  ,  $R = 4$                       c)  $Q = 67$  ,  $R = 2$                       d)  $Q = 16$  ,  $R = 6$

**EMMANUEL MISSION SR SEC SCHOOL, BEAWAR**  
**GENERAL SCIENCE**  
**CLASS - III**  
**Sample Paper 2**

---

Q1. \_\_\_\_\_ is an example of a solid ?

- a. Milk.    b. Wood.    c. Steam.    d. none of these

Q2. Which of the following spreads all over ?

- a. Book.    c. Gas.    c. Juice.    d. none of these

Q3. What is the process by which a liquid changes into its gaseous form called \_\_\_\_\_ ?

- a. Evaporation.    b. Condensation.    c. Melting.    d. none of these

Q4. Liquids take the shape of the container in which you keep them \_\_\_\_\_?

- a. True.    b. False.    c. Both.    d. None of these

Q5. Thing that melts \_\_\_\_\_ ?

- a. ice.    b. wood.    c. both.    d. none of these

Q6. We feel changes in our surroundings with the help of our \_\_\_\_\_

- a. Lungs.    b. Bones.    c. Sense organs.    d. none of these

Q7. Plants and animals are \_\_\_\_\_ things ?

- a. Living thing.    b. Non living thing.    c. Man made thing.    d. none of these

Q8. Green plants make their own food \_\_\_\_\_ ?

- a. True.    b. False.    c. both.    d. none of these

Q9. Things that living things do \_\_\_\_\_ ?

- a. walk.    b. run.    c. eat.    d. all of these

Q10. The part of the plant that grows above the ground is called \_\_\_\_\_ ?

- a. Route.    b. Shoot.    c. Bhoot.    d . none of these

Q11. We eat the leaves of \_\_\_\_\_ ?

- a. Ginger and garlic.    b. Guava and garlic.    c. Cabbage and coriander.    d.none of these

Q12. A mango has \_\_\_\_\_ seeds inside it?

- a. two.    b. one.    c. both.    d. none of these

Q13. The main stem of a tree \_\_\_\_\_ .

- a. trunk.    c. leaf.    d.both.    d. none of these

Q14. The most beautiful and colourful part of a plant \_\_\_\_\_.

- a. leaf.    b. flower.    c. stem    d. none of these

Q15. \_\_\_\_\_ grow into fruits ?

- a. leaf.    b. flower.    c. stem.    d. none of these



**EMMANUEL MISSION SR SEC SCHOOL, BEAWAR**  
**SOCIAL STUDIES**  
**CLASS - III**  
**Sample Paper 2**

---

**A. Multiple Choice Questions.**

1. Baku is worn by women in  
(a) Punjab      (b) Sikkim      (c) Uttarakhand      (d) Bihar
2. People in North India mostly eat  
(a) Rice      (b) Wheat      (c) Both of the above      (d) Bajra
3. Which of these is a religious festival?  
(a) Eid      (b) Pongal      (c) Republic Day      (d) Onam
4. Which is the fastest and the most expensive means of transport?  
(a) Aeroplane      (b) Ship      (c) Train      (d) Bike
5. People in the hills use mules and \_\_\_\_\_ to travel.  
(a) Camels      (b) Oxen      (c) Ponies      (d) Dogs
6. Mahatma Gandhi is also known as \_\_\_\_\_.  
(a) Bapu      (b) Chacha      (c) Brother      (d) Uncle
7. Bhubaneswar is the capital of  
(a) Kerala      (b) Tamil Nadu      (c) Odisha      (d) Chattisgarh
8. \_\_\_\_\_ is used in making food.  
(a) Water      (b) Oil      (c) Tea      (d) None of these
9. Name the popular dishes of South India  
(a) Idli      (b) Vada      (c) Noodles      (d) Pasta
10. A book of maps is called an \_\_\_\_\_.  
(a) Drawing      (b) Atlas      (c) Ramayana      (d) Mahabharata
11. The most popular dress of Indian women is  
(a) Salwar-kameez      (b) Lehnga-Choli      (c) Saree-blouse      (d) Lungi-Kurta
12. Write the types of festivals.  
(a) National festivals      (b) Religious festivals      (c) Harvest festivals      (d) All of these
13. Pongal is the harvest festival of \_\_\_\_\_.  
(a) Assam      (b) Punjab      (c) Tamil Nadu      (d) Rajasthan
14. Which of these is a spring festival of Mizoram?  
(a) Wangala      (b) Hornbill      (c) Chapchar Kut      (d) Baisakhi
15. How do people travel in villages?  
(a) Foot      (b) Bullock-Carts      (c) Bicycles      (d) All of these

**EMMANUEL MISSION SR SEC SCHOOL, BEAWAR**  
**COMPUTER**  
**CLASS - III**  
**Sample Paper 2**

---

- Q. 1 Using \_\_\_\_\_ menu you can save, print and open a file.
- a. Edit
  - b. File
  - c. Magnifier
  - d. Eraser
- Q. 2 The \_\_\_\_\_ is used to select the rectangle shaped drawing area.
- a. Select
  - b. Airbrush
  - c. Pen
  - d. None of these
- Q. 3 The \_\_\_\_\_ is used to erase drawing.
- a. Pencil
  - b. Eraser
  - c. Pen
  - d. None of these
- Q. 4 The \_\_\_\_\_ is used to magnify your view of a drawing.
- a. Magnifier
  - b. Text
  - c. Pencil
  - d. None of these
- Q. 5 Using \_\_\_\_\_ menu you can flip or rotate.
- a. Image
  - b. Edit
  - c. File
  - d. None of these
- Q. 6 What is M. S. Paint?
- a. Book
  - b. Pen
  - c. software that is used for drawing picture
  - d. None of these
- Q. 7 Which tool is used for drawing?
- a. Light
  - b. Fan
  - c. Pencil tool
  - d. None of these
- Q. 8 Which tool is used for colouring
- a. Eraser tool
  - b. Fill with colour tool
  - c. Both options a. And b.
  - d. None of these
- Q. 9 Which commands are used to move the picture from one position to another.
- a. Select tool
  - b. Free from select tool
  - c. Both options a. And b.
  - d. None of these
- Q. 10 Which option are available in the Image menu?
- a. Flip
  - b. Rotate
  - c. Skew
  - d. All of these

Q. 11 What is the “ STEP – 4 ” for printing a file?

- a. Click on Start button
- b. Click on print button
- c. Click on any icons
- d. None of these

Q. 12 What are icons ?

- a. Pen
- b. Eraser
- c. Small graphic pictures
- d. None of these

Q. 13 What is a Taskbar ?

- a. Long rectangular bar
- b. Pen
- c. Both options a. And b.
- d. None of the above

Q. 14 What is the use of START BUTTON?

- a. eraser all important functions
- b. Cook food
- c. Performs all important functions
- d. All of the above

Q. 15 What is the STEP – 1 to shut down the computer ?

- a. Click on the Start button
- b. Click on the Turn off button
- c. Both options a. And b.
- d. None of these

**EMMANUEL MISSION SR SEC SCHOOL, BEAWAR**  
**GENERAL KNOWLEDGE**  
**CLASS – III**  
**Sample Paper 2**

---

Q1. Polo is originated from :

- a. Iran. b. England. c. USA. d. none of these

Q2. Baseball is originated from:


- a. USA. b. Iran. c. Canada. d. none of these

Q3. Identify the following music maestros and tick the correct answer:




- a. Pt Hariprasad Chaurasia. b. Zakir Hussain. c. both. d. none of these

Q4. Identify the following music maestro ?



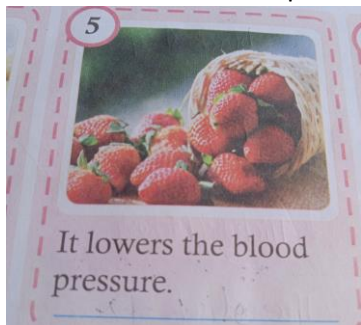
- a. Pt Hariprasad Chaurasia. b. Ustad Zakir Hussain  
c. Asad Ali Khan d. none of these

Q5. It reduces the risk of kidney stones :



- a. grape fruit. b. kiwi. c. Avocado. d. none of these

Q6. It lowers the blood pressure:



- a. kiwi. b. strawberry. c. both d. none of these

Q7. Here are some first lines from well known rhymes but a word is missing?

What word is missing?

\_\_\_\_\_ dock , The mouse ran up the clock.

- a. Mary. b. Hickory dickory. c. Humpty Dumpty. d. none of these

Q8. What word is missing ?

\_\_\_\_\_ had a little lamb, little lamb , little lamb.

- a. Kings horses. b. Mary. c. black sheep. d. none of these

Q9. Unscramble the letters and tick the correct name of the internal body part:

[ RANIB ]

- a. heart. b. brain. c. lungs. d. none of these

Q10. Unscramble the letters and tick the correct name of the internal body part:

[ SKEYIDN ]

- a. Heart. b. Skeleton. c. Kidney. d. None of these

Q11. The part that pumps blood into the body :

- a. Brain. b. Heart. c. skeleton d. Eye

Q12. The liquid in the mouth that helps soften the food we eat :

- a. saliva. b. chocolate. c. both d. none of these

Q13. The strong framework of bones that gives shape to the body

- a. Kidney. b. skeleton. c. both. d. none of these

Q14. Identify the following dance form :



- a. dhandiya. b. kathakali. c. garba. d. none of these

Q15. Identify the following dance form :



- a. Garba. b. bhangra. c. bihu. d. none of these

**EMMANUEL MISSION SR SEC SCHOOL, BEAWAR**  
**MORAL SCIENCE**  
**CLASS – III**  
**Sample Paper 2**

---

**A. Multiple choice questions.**

1. Children steal because they are  
a. Greedy      b. Happy      c. Sad      d. None of these
2. When I am studying, I will \_\_\_\_\_ and understand everything.  
a. Sleep      b. Try      c. Run      d. Fight
3. When the teacher is teaching in class, I will not think of \_\_\_\_\_.  
a. Books      b. Topic related questions      c. Games      d. None of these
4. \_\_\_\_\_ is a very important member of our family.  
a. Students      b. Neighbours      c. Father      d. All of these
5. Children do not respect the elders because they do not have \_\_\_\_\_.  
a. Chocolates      b. Ice cream      c. Pizza      d. Manners
6. A family is the best \_\_\_\_\_ by God.  
a. Toy      b. Game      c. Football      d. Gift
7. Who was the little girl? She gave a bill to her mother.  
a. Seeta      b. Geeta      c. Preeta      d. Smeeta
8. Who had a dirty mind?  
a. Mohan      b. Ravi      c. Ram      d. Bunt
9. Who were the best friends?  
a. Ravi, Rahul      b. Teena, Meena      c. Shanu, Manu      d. Rinky, Pinky
10. We must take care of our body as well as our \_\_\_\_\_.  
a. Stone      b. Luggage      c. Mind      d. Soil
11. \_\_\_\_\_ is happy with children who take care of their body and mind.  
a. Man      b. God      c. Devil      d. Friend
12. All the members of a family love and \_\_\_\_\_ each other.  
a. Disrespect      b. Not obey      c. Respect      d. Hate
13. Family is always there to listen to your problems when we are \_\_\_\_\_.  
a. Sad      b. Unhappy      c. Upset      d. All of the above
14. Some children become \_\_\_\_\_ due to their own carelessness.  
a. Happy      b. Deaf      c. Intelligent      d. None of these
15. Rahul's mind was clean but his \_\_\_\_\_ was dirty.  
a. Bag      b. Book      c. Body      d. Shoes